



Name: _____

Date: _____

Dino Math

Count to ten with these Dino counting exercises.


2 +




5 +



3 +



4 +




Name: _____

Date: _____


Dino Math

Count to ten with these Dino counting exercises.


1 +



7 +



5 +



6 +




Name: _____

Date: _____

Dino Math

Count to ten with these Dino counting exercises.


3 +



6 +



2 +



4 +



Name: _____

Date: _____

Dino Math

Count to ten with these Dino counting exercises.


4 +



3 +



5 +



1 +









Name: _____

Date: _____

Dino Math

Count to ten with these Dino counting exercises.



Name: _____

Date: _____

Dino Math

Count to ten with these Dino counting exercises.

